

# Soma Verdadeira

Nome: \_\_\_\_\_


Desenhe um caminho de cada avião para a sua resposta - não colida com outras nuvens ao longo do caminho

$$784 + 50 = 431$$

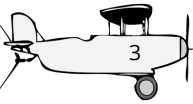


Verdadeiro

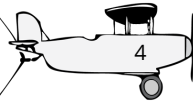
$$621 + 70 = 691$$




$$228 + 60 = 288$$



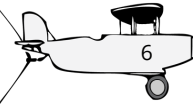
$$807 + 20 = 227$$



$$910 + 60 = 955$$



$$121 + 10 = 243$$



Falso

$$868 + 90 = 958$$



$$861 + 80 = 941$$



$$559 + 30 = 589$$



$$161 + 40 = 979$$

