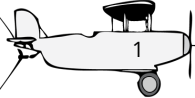


O voo da adição

Nome: _____


Desenhe um caminho de cada avião para a sua resposta - não colida com outras nuvens ao longo do caminho


$23 + 20 =$






$65 + 10 =$







$76 + 20 =$






$21 + 70 =$







$67 + 30 =$






$17 + 80 =$






$64 + 20 =$







$52 + 10 =$





$50 + 30 =$





$29 + 50 =$

